
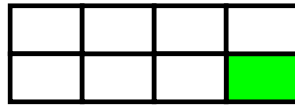




Όνοματεπώνυμο: _____


1. Τι μέρος κάθε σχήματος είναι χρωματισμένο; Γράφω το κατάλληλο κλάσμα:





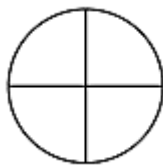




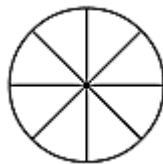




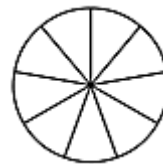
2. Χρωματίζω το μέρος του σχήματος που λέει κάθε κλάσμα.



$$\frac{1}{4}$$



$$\frac{1}{8}$$



$$\frac{1}{9}$$



6. Συμπληρώνω τις λέξεις ή τους αριθμούς που λείπουν:

$$\frac{1}{2}$$




...


.....



Ένα πέμπτο

$$\frac{1}{4}$$





Ένα εικοστό

