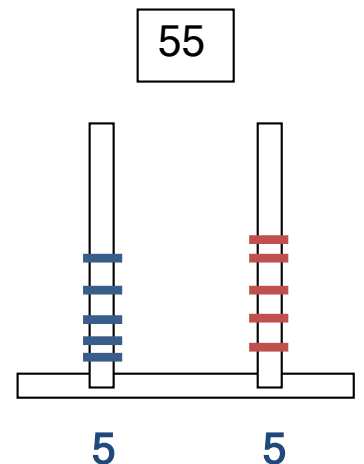
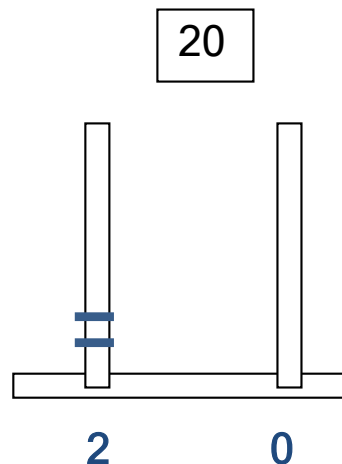
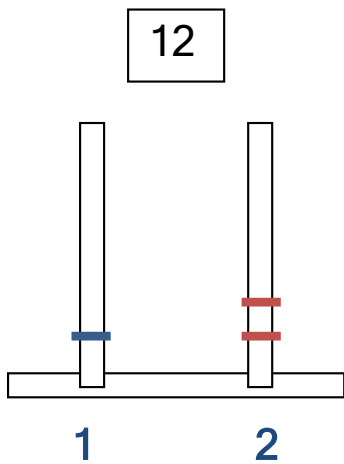
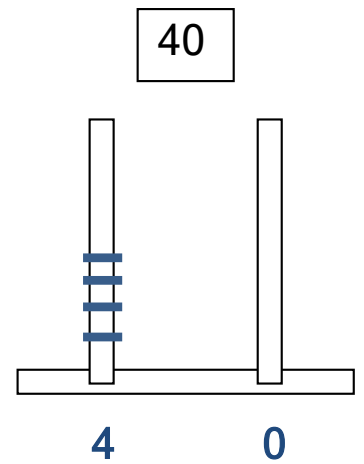
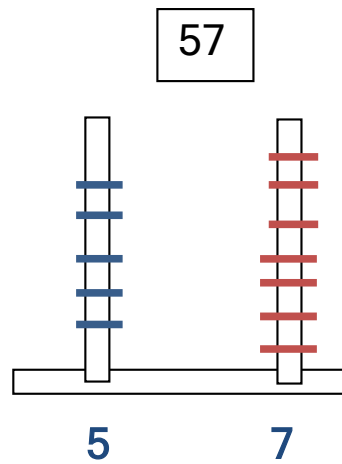
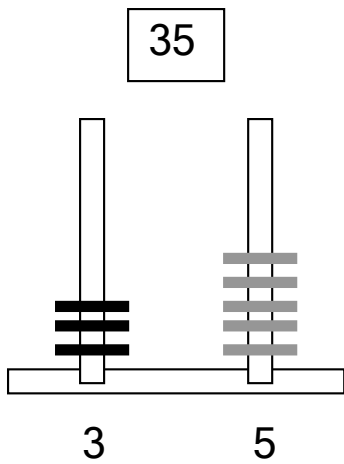


ΥΠΟΛΟΓΙΣΜΟΙ!!!

1. Σχηματίζω τους αριθμούς στον άβακα και τους γράφω, όπως στο παράδειγμα.



2. Βρίσκω τα αποτελέσματα των πράξεων.

$20 + 7 = 27$

$24 - 4 = 20$

$35 - 5 = 30$

$50 + 2 = 52$

$59 - 9 = 50$

$56 - 6 = 50$

$30 + 9 = 39$

$32 - 2 = 30$

$50 + 7 = 57$

$10 + 5 = 15$

$12 - 2 = 10$

$28 - 8 = 20$

$40 + 4 = 44$

$44 - 4 = 40$

$40 + 6 = 46$

$20 + 1 = 21$

$33 - 3 = 30$

$30 + 1 = 31$

ΥΠΟΛΟΓΙΣΜΟΙ!!!

$7 + 4 = 11$

$8 + 3 = 11$

$6 + 5 = 11$

$7 + 5 = 12$

$9 + 4 = 13$

$8 + 4 = 12$

$9 + 2 = 11$

$9 + 5 = 14$

$9 + 3 = 12$

$8 + 5 = 13$

$8 + 4 = 12$

$8 + 7 = 15$

$6 + 6 = 12$

$7 + 6 = 13$

$7 + 7 = 14$

$8 + 3 = 11$

$6 + 7 = 13$

$7 + 5 = 12$

