



ΜΑΘΗΜΑΤΙΚΑ

1. Γράφω τι ώρα δείχνουν τα παρακάτω ρολόγια :


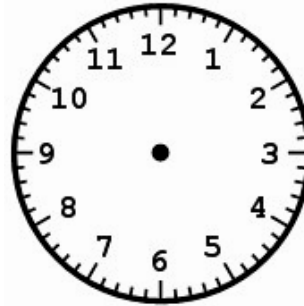




π.μ.

ή

μ.μ.

2. Βάζω τους δείκτες στα παρακάτω ρολόγια, όπως δείχνουν οι ώρες :


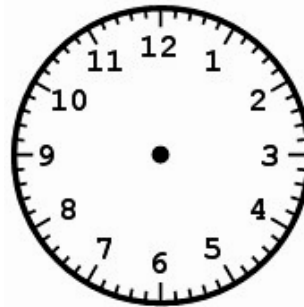




7.30

18.10

22.25

10.15



14.00

20.30

06.05

01.45

Όνοματεπώνυμο : _____

