


Πόσα είναι τα  
αυγά μέσα  
στο καλάθι;



$$\text{Egg 1} \square + \text{Egg 2} \square = \square$$


- 1
- 2
- 3
- 4
- 5
- 6
- 7
- 8
- 9
- 10



Πόσα είναι τα  
αυγά πάνω  
στο χορτάρι;



+



=

1

2

3

4

5

6




7

8



9

10


Πόσα είναι τα  
κοτοπουλάκια  
μου;



+



=



1

2

3

4

5

6


7

8

9

10

Πόσα  
κοτοπουλάκια  
βγήκαν από  
τα αυγά;



$$\text{chick} \square + \text{egg} \square = \square$$

- 1
- 2
- 3
- 4
- 5
- 6
- 7
- 8
- 9
- 10



Πόσα είναι  
τα καρότα;



$$\text{Carrot} \square + \text{Carrot} \square = \square$$

- 1
- 2
- 3
- 4
- 5
- 6
- 7
- 8
- 9
- 10