


# ΒΑΣΙΚΑ ΣΧΗΜΑΤΑ


ΤΕΤΡΑΓΩΝΟ




ΟΡΘΟΓΩΝΙΟ ΠΑΡΑΛΛΗΛΟΓΡΑΜΜΟ




ΚΥΚΛΟΣ




ΤΡΙΓΩΝΟ



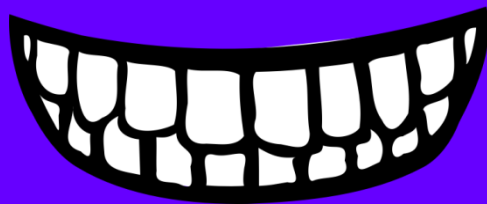

ΡΟΜΒΟΣ





ΤΡΑΠΕΖΙΟ



ΠΕΝΤΑΓΩΝΟ




ΞΑΓΩΝΟ






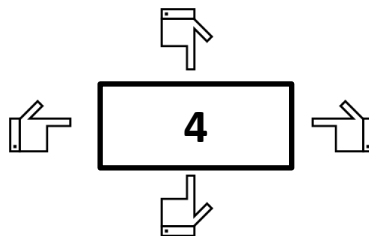
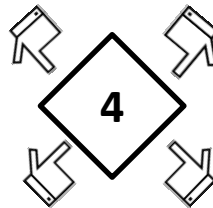

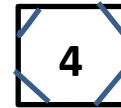
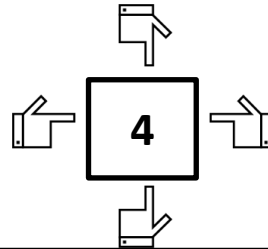

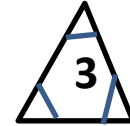
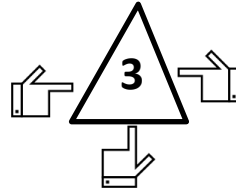

ΟΚΤΑΓΩΝΟ



# ΣΧΗΜΑΤΑ

# ΠΛΕΥΡΕΣ

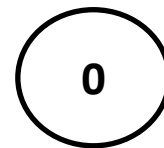
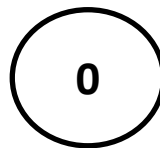

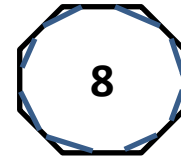
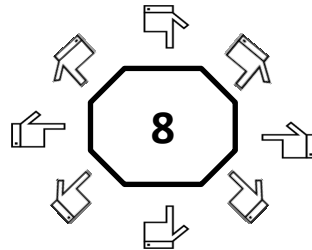

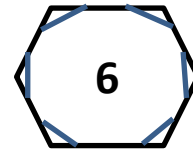
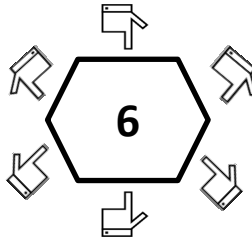

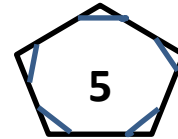

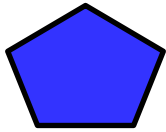
# ΓΩΝΙΕΣ



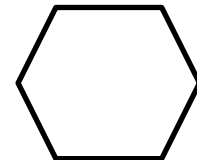
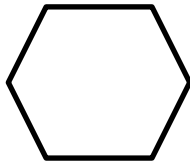
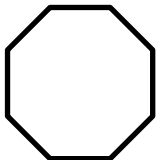
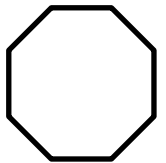



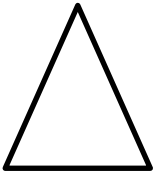


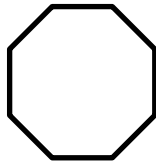


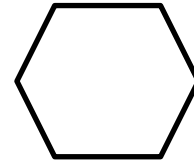



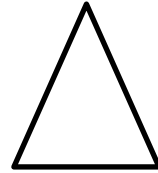
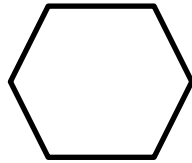

**ΣΧΗΜΑΤΑ**

**ΠΛΕΥΡΕΣ**


**ΓΩΝΙΕΣ**



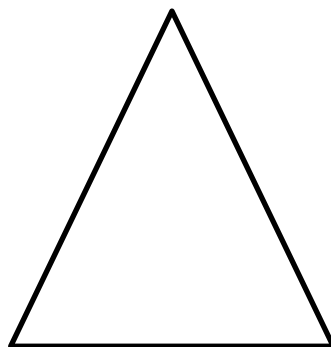
Χρωμάτισε όλα τους ρόμβους κίτρινους και όλα τα εξάγωνα πορτοκαλί



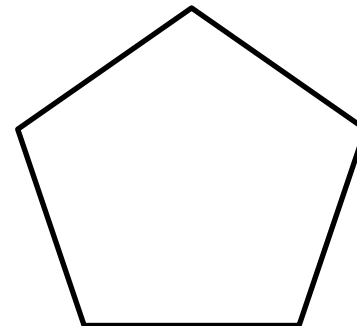
# ΒΑΣΙΚΑ ΣΧΗΜΑΤΑ




**ΤΕΤΡΑΓΩΝΟ**




**ΤΡΙΓΩΝΟ**



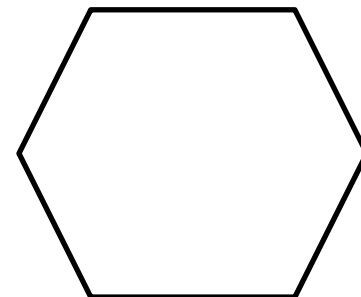
**ΠΕΝΤΑΓΩΝΟ**




**ΟΡΘΟΓΩΝΙΟ  
ΠΑΡΑΛΛΗΛΟΓΡΑΜΜΟ**



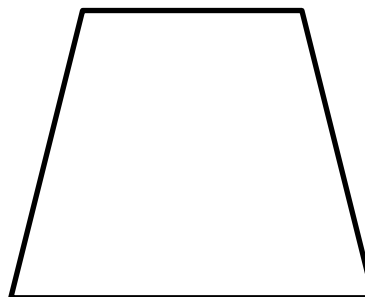
**ΡΟΜΒΟΣ**



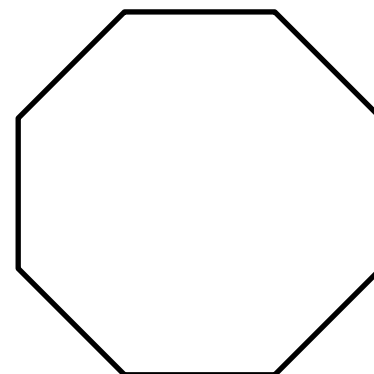
**ΕΞΑΓΩΝΟ**



**ΚΥΚΛΟΣ**



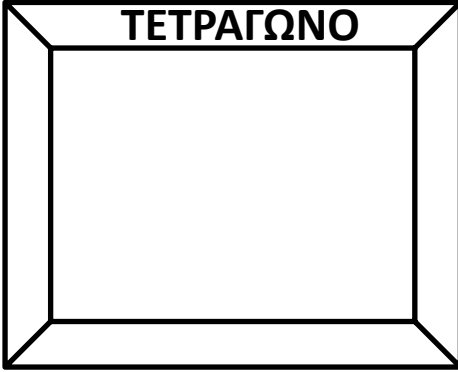
**ΤΡΑΠΕΖΙΟ**



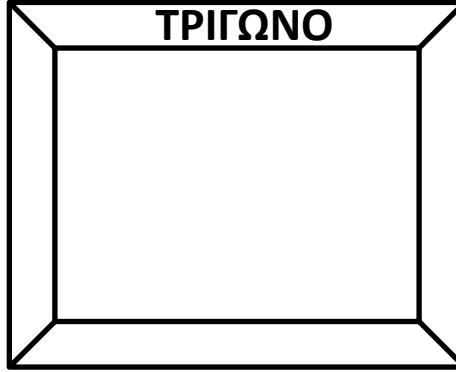
**ΟΚΤΑΓΩΝΟ**

**ΖΩΓΡΑΦΙΣΕ ΤΑ ΣΧΗΜΑΤΑ**

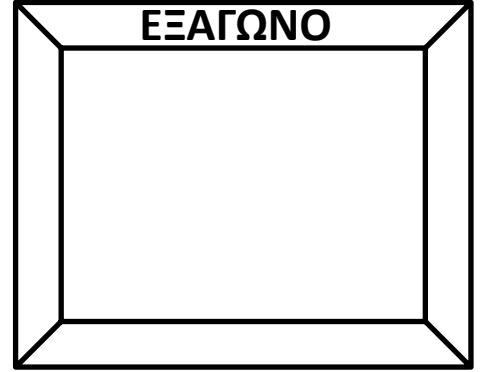
**ΤΕΤΡΑΓΩΝΟ**



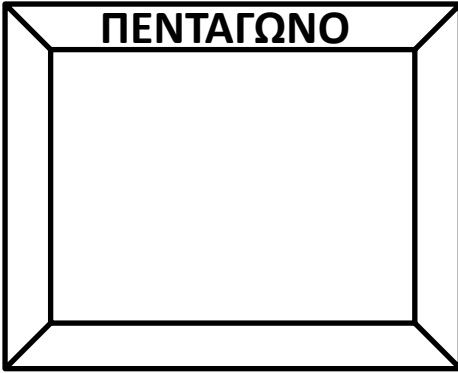
**ΤΡΙΓΩΝΟ**



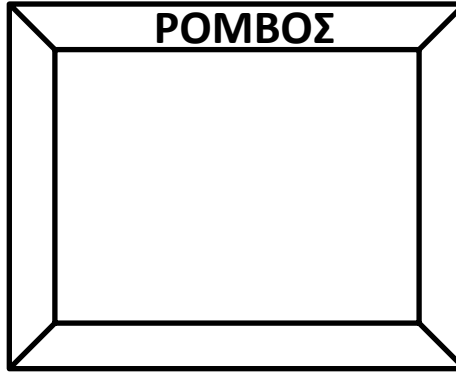
**ΕΞΑΓΩΝΟ**



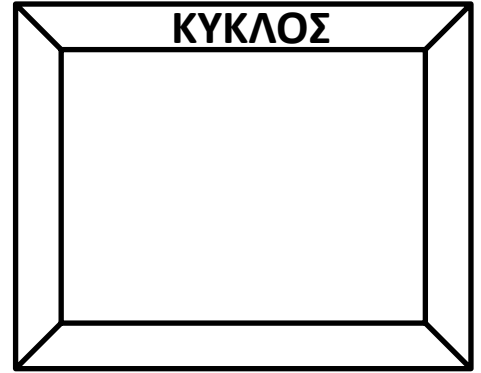
**ΠΕΝΤΑΓΩΝΟ**



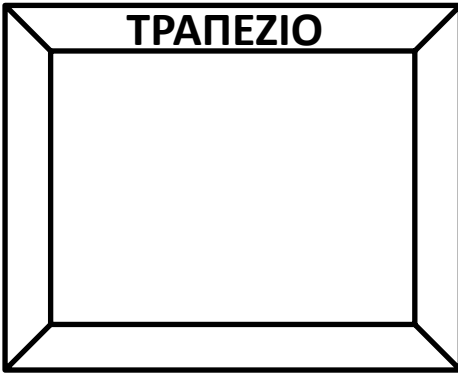
**ΡΟΜΒΟΣ**



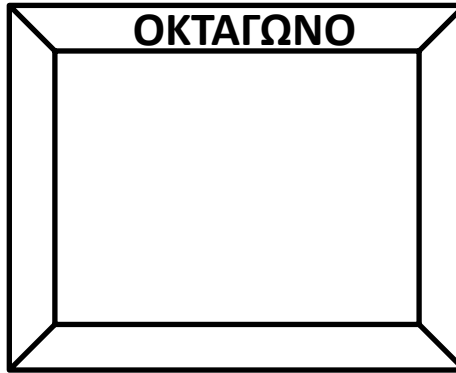
**ΚΥΚΛΟΣ**



**ΤΡΑΠΕΖΙΟ**



**ΟΚΤΑΓΩΝΟ**




**ΟΡΘΟΓΩΝΙΟ ΠΑΡΑΛΛ**




# ΤΑΓΚΡΑΜ

Πόσα είναι τα...



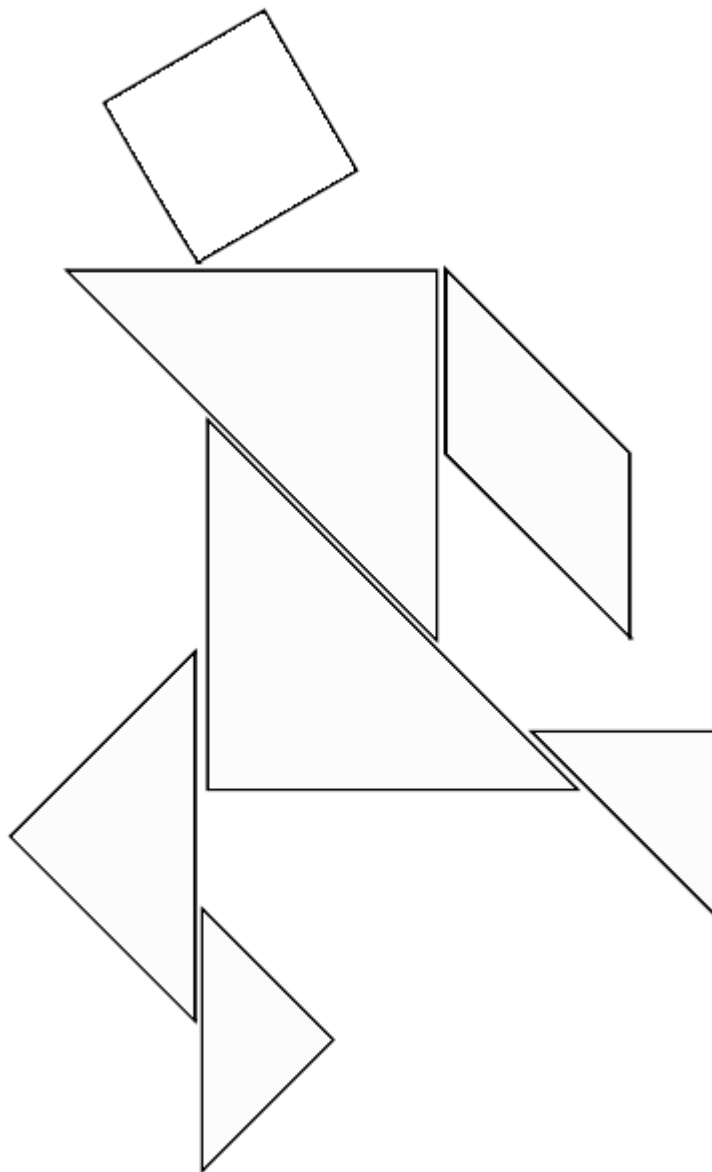
\_\_\_\_\_







\_\_\_\_\_



\_\_\_\_\_

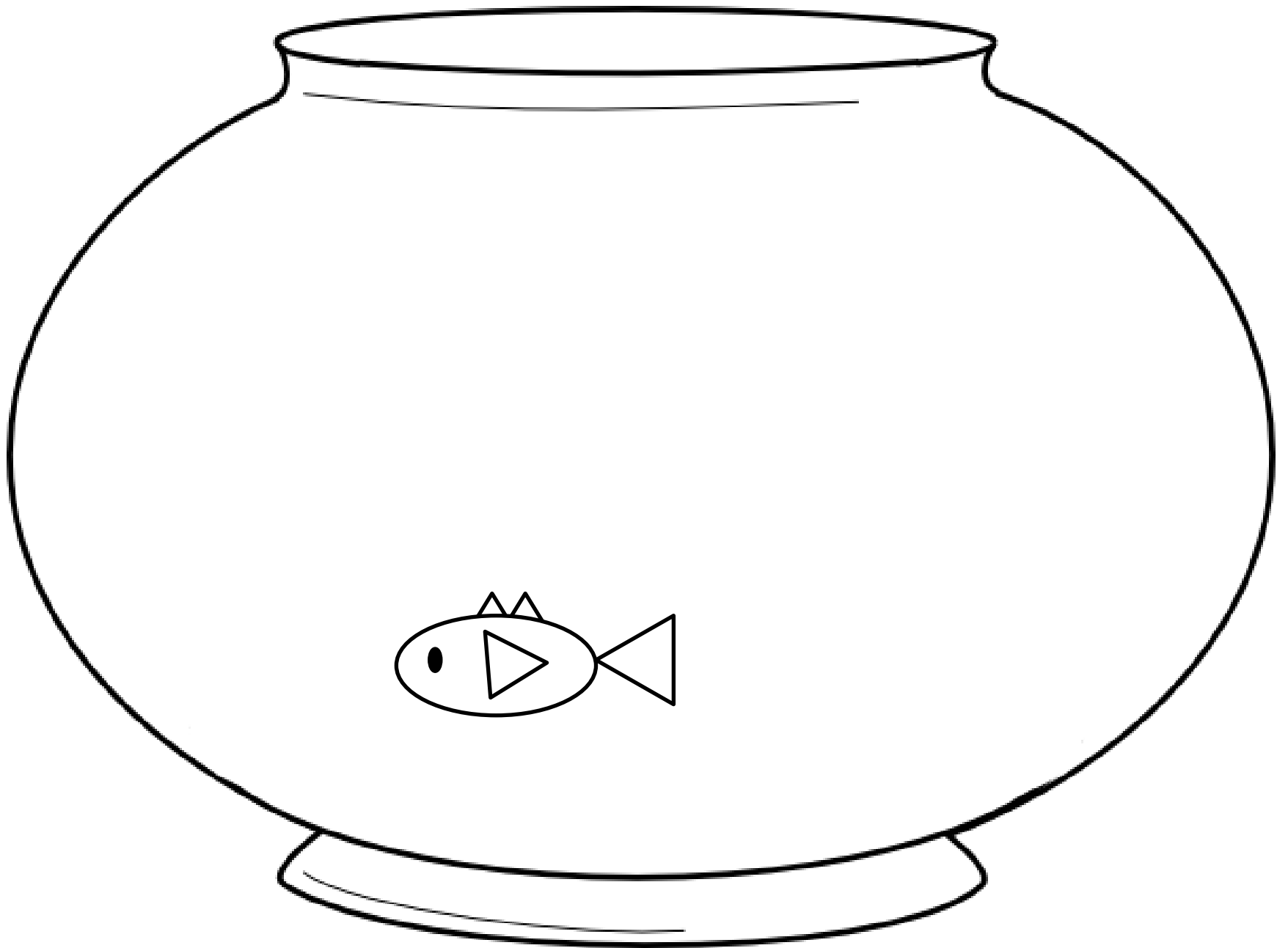


Σχεδιάσε τα σχήματα που έμαθες στους γεωπίνακες







Χρησιμοποίησε τα σχήματα για να γεμίσεις τη γυάλα!




# ΡΟΖΕΤΑ ΜΕ 6 ΚΥΚΛΟΥΣ



**ΡΟΖΕΤΑ ΜΕ 24 ΚΥΚΛΟΥΣ**




Σχημάτισε κι εσύ την δική σου ροζέτα

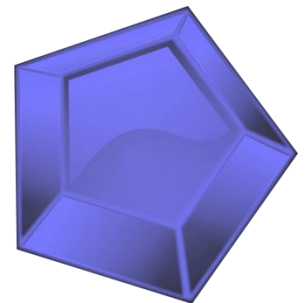
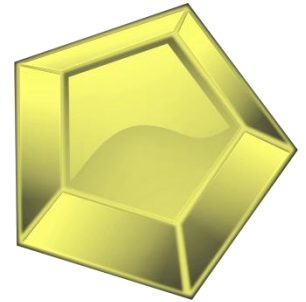

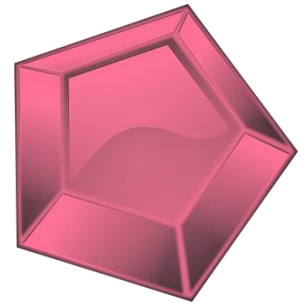



Λύσε τους γρίφους και μάζεψε οσα  
περισσότερα πετράδια μπορείς !!!













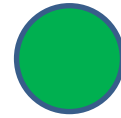




ΕΧΕΙ 4 ΠΛΕΥΡΕΣ ΚΑΙ 4  
ΓΩΝΙΕΣ. ΕΙΝΑΙ ΠΡΑΣΙΝΟ



ΕΧΕΙ 4 ΠΛΕΥΡΕΣ ΚΑΙ 4  
ΓΩΝΙΕΣ. ΕΙΝΑΙ ΠΡΑΣΙΝΟ



ΔΕΝ ΕΧΕΙ ΠΛΕΥΡΕΣ ΚΑΙ  
ΓΩΝΙΕΣ, ΕΙΝΑΙ ΠΡΑΣΙΝΟ



ΕΧΕΙ 4 ΠΛΕΥΡΕΣ ΚΑΙ 4  
ΓΩΝΙΕΣ. ΕΙΝΑΙ ΠΟΡΤΟΚΑΛΙ



ΕΧΕΙ 4 ΠΛΕΥΡΕΣ ΚΑΙ 4  
ΓΩΝΙΕΣ. ΕΙΝΑΙ ΠΟΡΤΟΚΑΛΙ



ΔΕΝ ΕΧΕΙ ΠΛΕΥΡΕΣ ΚΑΙ  
ΓΩΝΙΕΣ, ΕΙΝΑΙ ΠΟΡΤΟΚΑΛΙ



ΕΧΕΙ 4 ΠΛΕΥΡΕΣ ΚΑΙ 4  
ΓΩΝΙΕΣ. ΕΙΝΑΙ ΚΟΚΚΙΝΟ



ΕΧΕΙ 4 ΠΛΕΥΡΕΣ ΚΑΙ 4  
ΓΩΝΙΕΣ. ΕΙΝΑΙ ΚΟΚΚΙΝΟ



ΔΕΝ ΕΧΕΙ ΠΛΕΥΡΕΣ ΚΑΙ  
ΓΩΝΙΕΣ, ΕΙΝΑΙ ΜΩΒ




ΕΧΕΙ 4 ΠΛΕΥΡΕΣ ΚΑΙ 4  
ΓΩΝΙΕΣ. ΕΙΝΑΙ ΜΠΛΕ




ΕΧΕΙ 4 ΠΛΕΥΡΕΣ ΚΑΙ 4  
ΓΩΝΙΕΣ. ΕΙΝΑΙ ΜΠΛΕ




ΔΕΝ ΕΧΕΙ ΠΛΕΥΡΕΣ ΚΑΙ  
ΓΩΝΙΕΣ, ΕΙΝΑΙ ΜΠΛΕ



ΕΧΕΙ 5 ΠΛΕΥΡΕΣ ΚΑΙ 5  
ΓΩΝΙΕΣ. ΕΙΝΑΙ ΜΩΒ




ΕΧΕΙ 6 ΠΛΕΥΡΕΣ ΚΑΙ 6  
ΓΩΝΙΕΣ. ΕΙΝΑΙ ΠΡΑΣΙΝΟ




ΕΧΕΙ 8 ΠΛΕΥΡΕΣ ΚΑΙ 8  
ΓΩΝΙΕΣ. ΕΙΝΑΙ ΠΡΑΣΙΝΟ




ΕΧΕΙ 5 ΠΛΕΥΡΕΣ ΚΑΙ 5  
ΓΩΝΙΕΣ. ΕΙΝΑΙ ΚΟΚΚΙΝΟ




ΕΧΕΙ 6 ΠΛΕΥΡΕΣ ΚΑΙ 6  
ΓΩΝΙΕΣ. ΕΙΝΑΙ ΜΩΒ




ΕΧΕΙ 8 ΠΛΕΥΡΕΣ ΚΑΙ 8  
ΓΩΝΙΕΣ. ΕΙΝΑΙ ΜΠΛΕ



ΕΧΕΙ 5 ΠΛΕΥΡΕΣ ΚΑΙ 5  
ΓΩΝΙΕΣ. ΕΙΝΑΙ ΚΙΤΡΙΝΟ




ΕΧΕΙ 6 ΠΛΕΥΡΕΣ ΚΑΙ 6  
ΓΩΝΙΕΣ. ΕΙΝΑΙ ΚΟΚΚΙΝΟ




ΕΧΕΙ 8 ΠΛΕΥΡΕΣ ΚΑΙ 8  
ΓΩΝΙΕΣ. ΕΙΝΑΙ ΚΟΚΚΙΝΟ



ΕΧΕΙ 5 ΠΛΕΥΡΕΣ ΚΑΙ 5  
ΓΩΝΙΕΣ. ΕΙΝΑΙ ΜΠΛΕ



ΕΧΕΙ 6 ΠΛΕΥΡΕΣ ΚΑΙ 6  
ΓΩΝΙΕΣ. ΕΙΝΑΙ ΓΚΡΙ



ΕΧΕΙ 8 ΠΛΕΥΡΕΣ ΚΑΙ 8  
ΓΩΝΙΕΣ. ΕΙΝΑΙ ΚΙΤΡΙΝΟ

?

ΕΧΕΙ 4 ΠΛΕΥΡΕΣ ΚΑΙ 4  
ΓΩΝΙΕΣ. ΕΙΝΑΙ ΠΡΑΣΙΝΟ

?

ΕΧΕΙ 4 ΠΛΕΥΡΕΣ ΚΑΙ 4  
ΓΩΝΙΕΣ. ΕΙΝΑΙ ΠΡΑΣΙΝΟ

?

ΔΕΝ ΕΧΕΙ ΠΛΕΥΡΕΣ ΚΑΙ  
ΓΩΝΙΕΣ, ΕΙΝΑΙ ΠΡΑΣΙΝΟ

?

ΕΧΕΙ 4 ΠΛΕΥΡΕΣ ΚΑΙ 4  
ΓΩΝΙΕΣ. ΕΙΝΑΙ ΠΟΡΤΟΚΑΛΙ

?

ΕΧΕΙ 4 ΠΛΕΥΡΕΣ ΚΑΙ 4  
ΓΩΝΙΕΣ. ΕΙΝΑΙ ΠΟΡΤΟΚΑΛΙ

?

ΔΕΝ ΕΧΕΙ ΠΛΕΥΡΕΣ ΚΑΙ  
ΓΩΝΙΕΣ, ΕΙΝΑΙ ΚΙΤΡΙΝΟ

?

ΕΧΕΙ 4 ΠΛΕΥΡΕΣ ΚΑΙ 4  
ΓΩΝΙΕΣ. ΕΙΝΑΙ ΚΟΚΚΙΝΟ

?

ΕΧΕΙ 4 ΠΛΕΥΡΕΣ ΚΑΙ 4  
ΓΩΝΙΕΣ. ΕΙΝΑΙ ΚΟΚΚΙΝΟ

?

ΔΕΝ ΕΧΕΙ ΠΛΕΥΡΕΣ ΚΑΙ  
ΓΩΝΙΕΣ, ΕΙΝΑΙ ΜΩΒ

?

ΕΧΕΙ 4 ΠΛΕΥΡΕΣ ΚΑΙ 4  
ΓΩΝΙΕΣ. ΕΙΝΑΙ ΜΠΛΕ

?

ΕΧΕΙ 4 ΠΛΕΥΡΕΣ ΚΑΙ 4  
ΓΩΝΙΕΣ. ΕΙΝΑΙ ΜΠΛΕ

?

ΔΕΝ ΕΧΕΙ ΠΛΕΥΡΕΣ ΚΑΙ  
ΓΩΝΙΕΣ, ΕΙΝΑΙ ΜΠΛΕ

?

ΕΧΕΙ 5 ΠΛΕΥΡΕΣ ΚΑΙ 5  
ΓΩΝΙΕΣ. ΕΙΝΑΙ ΜΩΒ

?

ΕΧΕΙ 6 ΠΛΕΥΡΕΣ ΚΑΙ 6  
ΓΩΝΙΕΣ. ΕΙΝΑΙ ΠΡΑΣΙΝΟ

?

ΕΧΕΙ 8 ΠΛΕΥΡΕΣ ΚΑΙ 8  
ΓΩΝΙΕΣ. ΕΙΝΑΙ ΠΡΑΣΙΝΟ

?

ΕΧΕΙ 5 ΠΛΕΥΡΕΣ ΚΑΙ 5  
ΓΩΝΙΕΣ. ΕΙΝΑΙ ΚΟΚΚΙΝΟ

?

ΕΧΕΙ 6 ΠΛΕΥΡΕΣ ΚΑΙ 6  
ΓΩΝΙΕΣ. ΕΙΝΑΙ ΜΩΒ

?

ΕΧΕΙ 8 ΠΛΕΥΡΕΣ ΚΑΙ 8  
ΓΩΝΙΕΣ. ΕΙΝΑΙ ΜΠΛΕ

?

ΕΧΕΙ 5 ΠΛΕΥΡΕΣ ΚΑΙ 5  
ΓΩΝΙΕΣ. ΕΙΝΑΙ ΚΙΤΡΙΝΟ

?

ΕΧΕΙ 6 ΠΛΕΥΡΕΣ ΚΑΙ 6  
ΓΩΝΙΕΣ. ΕΙΝΑΙ ΚΟΚΚΙΝΟ

?

ΕΧΕΙ 8 ΠΛΕΥΡΕΣ ΚΑΙ 8  
ΓΩΝΙΕΣ. ΕΙΝΑΙ ΚΟΚΚΙΝΟ

?

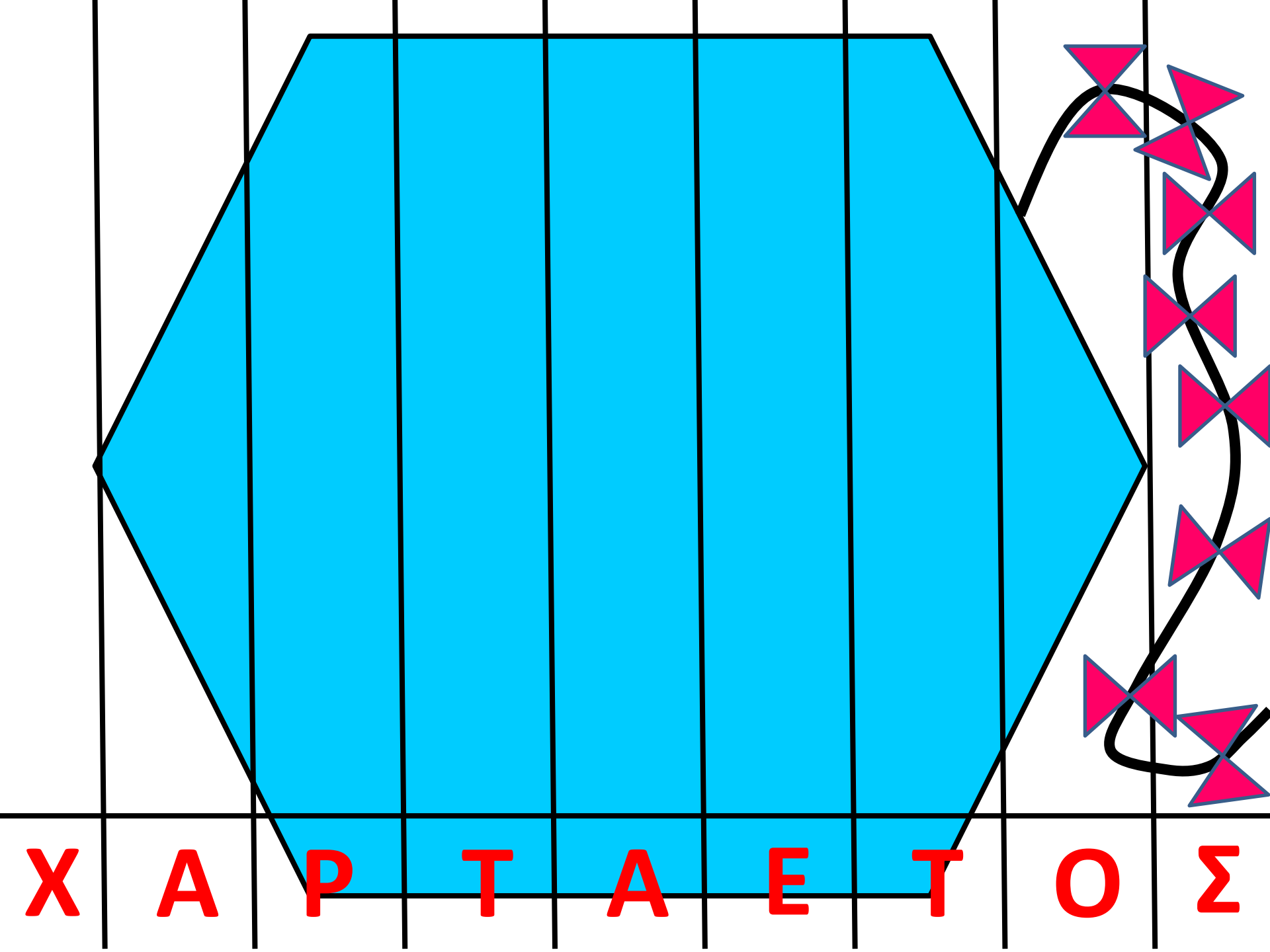
ΕΧΕΙ 5 ΠΛΕΥΡΕΣ ΚΑΙ 5  
ΓΩΝΙΕΣ. ΕΙΝΑΙ ΜΠΛΕ

?

ΕΧΕΙ 6 ΠΛΕΥΡΕΣ ΚΑΙ 6  
ΓΩΝΙΕΣ. ΕΙΝΑΙ ΓΚΡΙ

?

ΕΧΕΙ 8 ΠΛΕΥΡΕΣ ΚΑΙ 8  
ΓΩΝΙΕΣ. ΕΙΝΑΙ ΚΙΤΡΙΝΟ



X

A

P

T



A

E

T

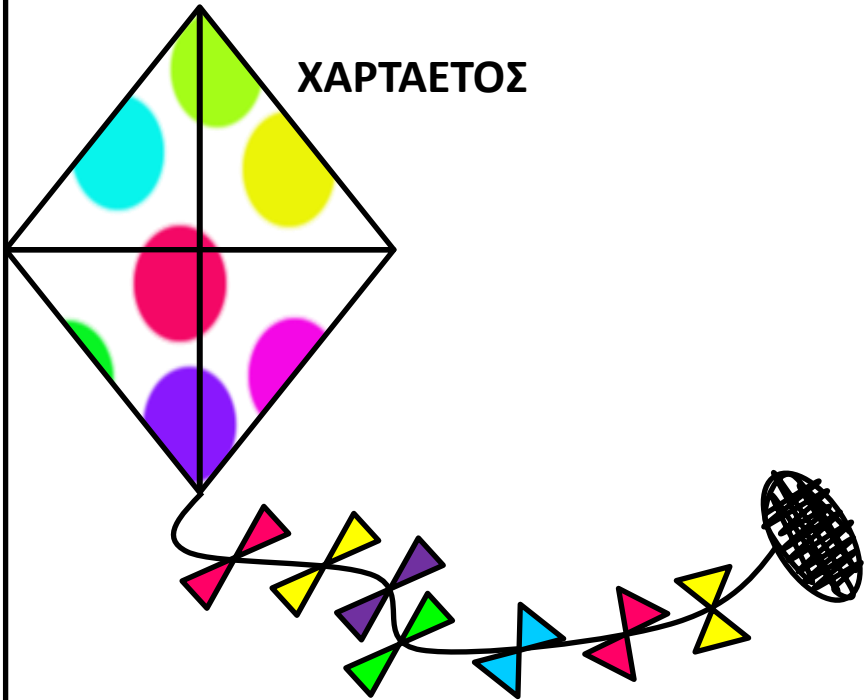
O

Σ



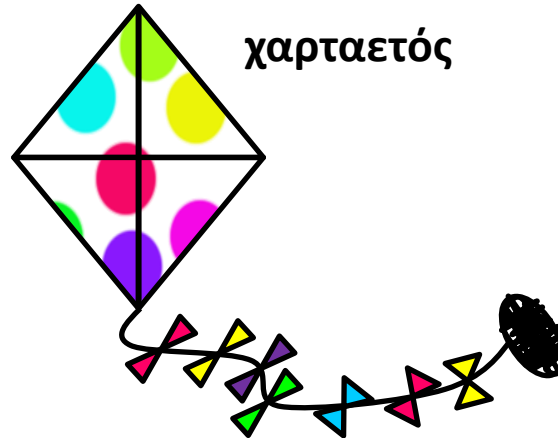
Χ Α Ρ Τ Α Ε Τ Ο Σ

ΧΑΡΤΑΕΤΟΣ



X

χαρταετός



χ



