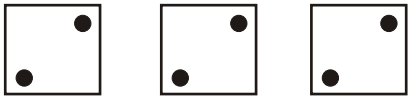
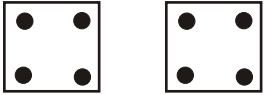


Μάθημα 53

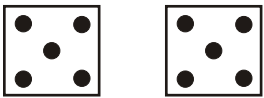
Κοίταξε τα ζάρια κάθε σειράς και λογάριασε όπως το παράδειγμα.




...3... φορές το ...2... = ...2... + ...2... + ...2... =




..... φορές το = + =



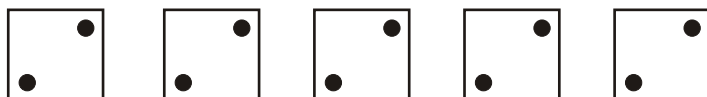
..... φορές το = + =



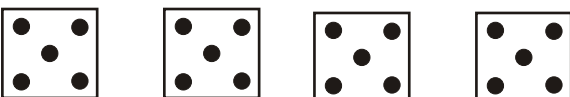
..... φορές το = + + =



..... φορές το = + + =



..... φορές το = + + + + =



..... φορές το = + + + =



Όνομα: _____