

ΧΡΙΣΤΟΥΓΕΝΝΙΑΤΙΚΕΣ ΑΙΚΗΘΕΙΣ




Όνομα:.....

Ημερομηνία:.....




Συμπλήρωσε τους αριθμούς που λείπουν:



20, 18, __, __, __, __, __, __, __, __, __

35, 40, __, __, __, __, __, __, __, __, __



10, 20, 30, __, __, __, __, __, __, __



5, 25, __, __, __

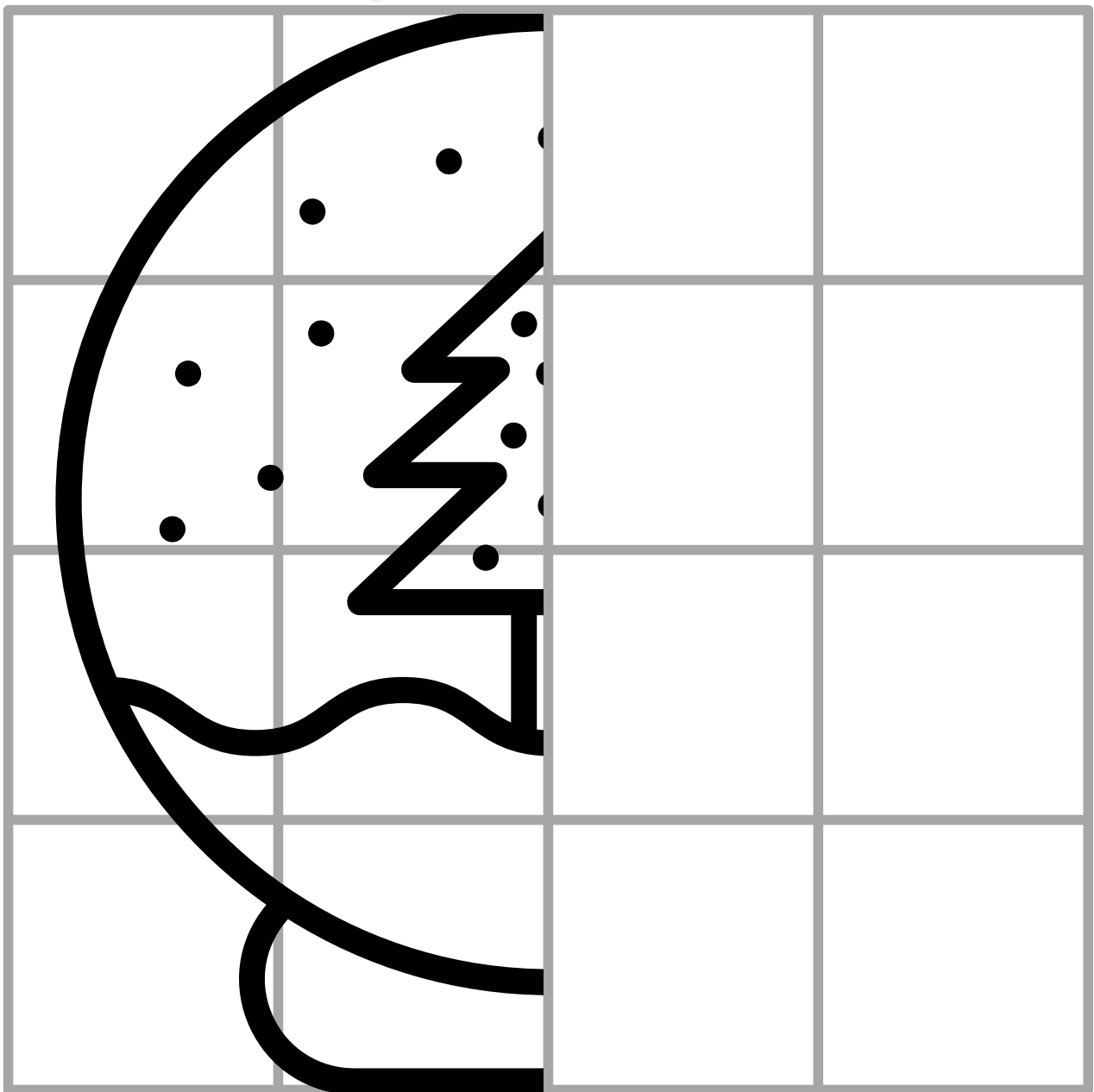
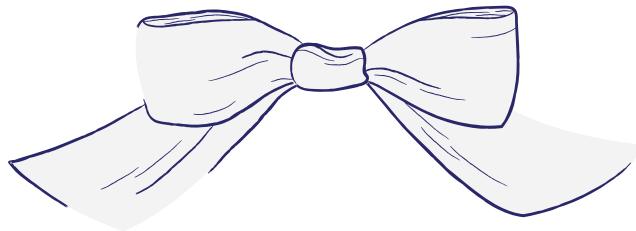
57, 54, __, __, __, __, __, __, __, __, __



39, 41, __, __, __, __, __, __, __, __, __









Μπορείς να φτιάξεις ολόκληρη την εικόνα;



















































 = 2  = 3

 = 5  = 4

 = 10  = 6

Πόση είναι η αξία
του κάθε μοτίβο;



Μην ξεχνάς: δεκάδες κάτω
από δεκάδες, μονάδες κάτω
από μονάδες.

$$\begin{array}{r} 43 \\ +15 \\ \hline \end{array}$$

$$\begin{array}{r} 9 \\ +6 \\ \hline \end{array}$$

$$\begin{array}{r} 57 \\ -31 \\ \hline \end{array}$$

$$\begin{array}{r} 5 \\ +7 \\ \hline \end{array}$$

$$\begin{array}{r} 2 \\ +63 \\ \hline \end{array}$$

$$\begin{array}{r} 23 \\ +3 \\ \hline \end{array}$$

$$\begin{array}{r} 84 \\ +13 \\ \hline \end{array}$$

$$\begin{array}{r} 4 \\ +75 \\ \hline \end{array}$$

$$\begin{array}{r} 81 \\ -11 \\ \hline \end{array}$$

$$\begin{array}{r} 52 \\ -32 \\ \hline \end{array}$$

$$\begin{array}{r} 36 \\ +3 \\ \hline \end{array}$$

$$\begin{array}{r} 19 \\ -4 \\ \hline \end{array}$$

$$\begin{array}{r} 9 \\ +6 \\ \hline \end{array}$$

$$\begin{array}{r} 16 \\ -13 \\ \hline \end{array}$$

$$\begin{array}{r} 48 \\ -5 \\ \hline \end{array}$$

$$\begin{array}{r} 7 \\ +5 \\ \hline \end{array}$$

$$\begin{array}{r} 60 \\ +3 \\ \hline \end{array}$$

$$\begin{array}{r} 8 \\ +4 \\ \hline \end{array}$$

$$\begin{array}{r} 55 \\ -4 \\ \hline \end{array}$$

$$\begin{array}{r} 4 \\ +6 \\ \hline \end{array}$$

$$\begin{array}{r} 61 \\ +5 \\ \hline \end{array}$$

$$\begin{array}{r} 14 \\ +25 \\ \hline \end{array}$$

$$\begin{array}{r} 9 \\ +1 \\ \hline \end{array}$$

$$\begin{array}{r} 6 \\ +7 \\ \hline \end{array}$$

$$\begin{array}{r} 43 \\ +7 \\ \hline \end{array}$$


$$\begin{array}{r} 72 \\ +5 \\ \hline \end{array}$$

$$\begin{array}{r} 8 \\ +6 \\ \hline \end{array}$$

$$\begin{array}{r} 57 \\ +12 \\ \hline \end{array}$$

$$\begin{array}{r} 14 \\ -5 \\ \hline \end{array}$$

$$\begin{array}{r} 2 \\ +66 \\ \hline \end{array}$$





Κάνω μπόλκη εξάσκηση!






$15 + 7 =$	
$69 + 3 =$	
$52 + 6 =$	
$8 + 4 =$	
$40 + 5 =$	
$11 + 9 =$	
$3 + 8 =$	
$7 + 2 =$	
$20 + 0 =$	
$12 + 6 =$	
$11 + 1 =$	
$4 + 5 =$	
$2 + 10 =$	
$9 + 7 =$	
$13 + 2 =$	
$68 + 3 =$	
$15 + 4 =$	
$6 + 8 =$	
$14 + 5 =$	
$10 + 9 =$	

$5 + 8 =$	
$3 + 7 =$	
$39 + 4 =$	
$6 + 5 =$	
$2 + 9 =$	
$11 + 3 =$	
$8 + 6 =$	
$1 + 10 =$	
$17 + 22 =$	
$4 + 6 =$	
$12 + 1 =$	
$5 + 7 =$	
$9 + 2 =$	
$53 + 8 =$	
$10 + 4 =$	
$6 + 9 =$	
$82 + 5 =$	
$11 + 1 =$	
$74 + 3 =$	
$8 + 47 =$	

$8 + 9 =$	
$25 + 6 =$	
$12 + 4 =$	
$72 + 17 =$	
$11 + 8 =$	
$3 + 14 =$	
$7 + 10 =$	
$16 + 3 =$	
$1 + 18 =$	
$13 + 6 =$	
$4 + 15 =$	
$9 + 11 =$	
$0 + 20 =$	
$19 + 1 =$	
$36 + 13 =$	
$15 + 5 =$	
$90 + 9 =$	
$14 + 6 =$	
$17 + 2 =$	
$20 + 0 =$	

Η Βασιλική έχει 26 καραμέλες.
Ο Μανόλης έχει τις διπλάσιες.
Πόσες έχει ο Μανόλης;
Πόσες έχουν μαζί;

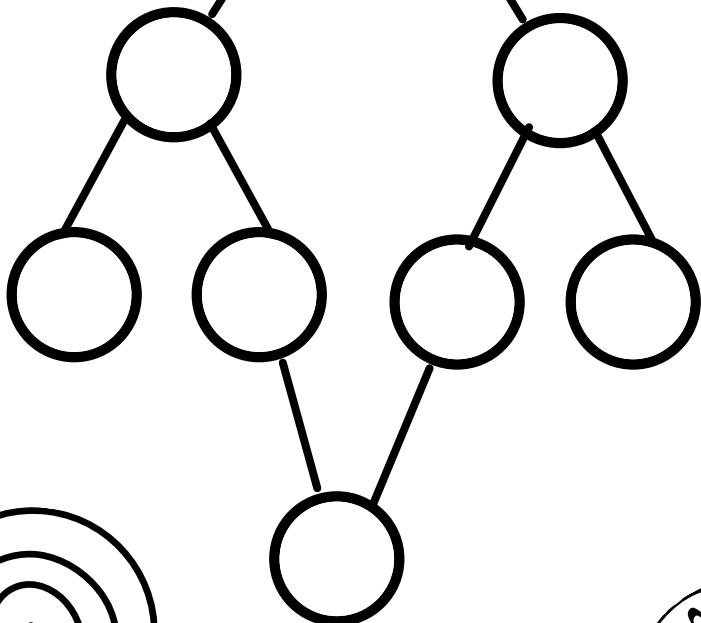
Θυμήσου πώς
βρίσκουμε το διπλάσιο.





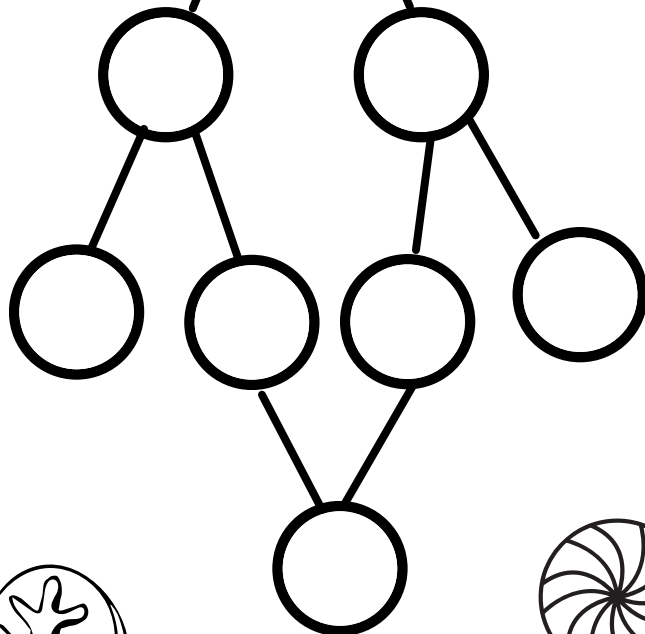
Βρίσκω τα μισά των αριθμών:



38



76



52

