




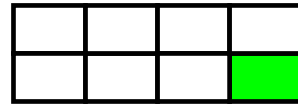
Όνομα _____
Επώνυμο _____
Ημ/νία _____

Οι κλασματικές μονάδες


1. Τι μέρος κάθε σχήματος είναι χρωματισμένο;
Γράφω το κατάλληλο κλάσμα:




↻ —



↻ —

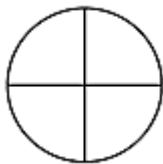


↻ —

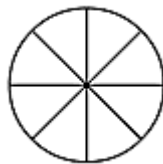


↻ —

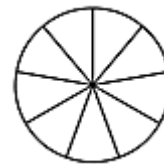
2. Χρωματίζω το μέρος του σχήματος που λέει κάθε κλάσμα.




$$\frac{1}{4}$$



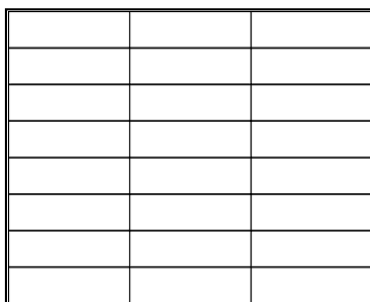
$$\frac{1}{8}$$



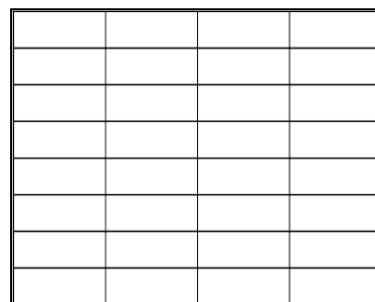
$$\frac{1}{9}$$



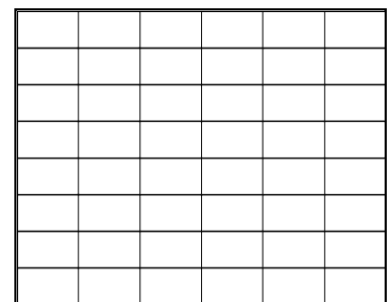
3. Χρωματίζω το:



$$\frac{1}{3}$$

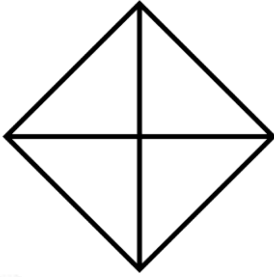



$$\frac{1}{4}$$

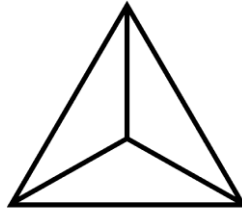


$$\frac{1}{6}$$

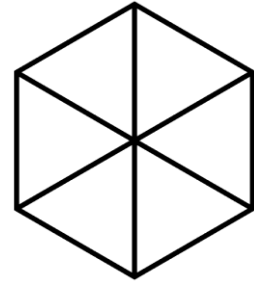
4. Χρωματίζω το:



$$\frac{1}{4}$$




$$\frac{1}{3}$$

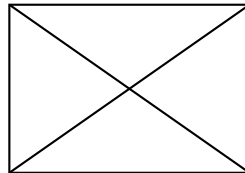


$$\frac{1}{6}$$

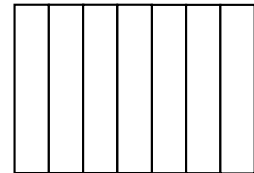
5. Χρωματίζω το μέρος του σχήματος που λέει κάθε κλάσμα:



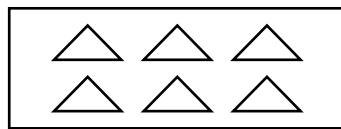
$$\frac{1}{5}$$



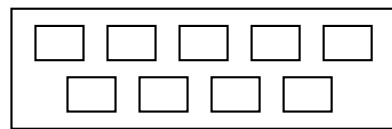
$$\frac{1}{4}$$



$$\frac{1}{7}$$




$$\frac{1}{6}$$



$$\frac{1}{9}$$




6. Συμπληρώνω τις λέξεις ή τους αριθμούς που λείπουν:


$\frac{1}{2}$ 

 Ένα δωδέκατο


$\frac{1}{4}$ 

 Ένα εικοστό

$\frac{1}{6}$ 


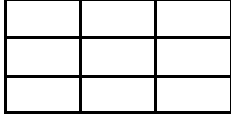




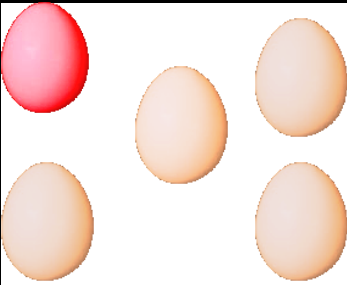

 Ένα έβδομο

$\frac{1}{9}$ 

 Ένα όγδοο

$\frac{1}{10}$ 

7. Σχηματίζω και γράφω τις κλασματικές μονάδες.

Ένα ένατο		
Κυκλώνω	Χρωματίζω	Γράφω το κλάσμα
		_____
Ένα τρίτο		
Κυκλώνω	Χρωματίζω	Γράφω το κλάσμα
		_____
Ένα δεύτερο		
Κυκλώνω	Χρωματίζω	Γράφω το κλάσμα
		_____
Ένα πέμπτο		
Κυκλώνω	Χρωματίζω	Γράφω το κλάσμα
		_____