

Βρίσκω την προπαίδεια του 8 (ΛΥΣΕΙΣ)

Όνομα: _____

1. Χρωμάτισε τα σωστά κουτάκια και γράψε τα αντίστοιχα αθροίσματα.

Δες το παράδειγμα

4×8

$8 + 8 + 8 + 8 = \cancel{24} \ 32$

8	8	8	8	8	8	8	8	8	8
---	---	---	---	---	---	---	---	---	---

3×8

$8 + 8 + 8 = 24$

8	8	8	8	8	8	8	8	8	8
--------------	--------------	--------------	---	---	---	---	---	---	---

8×5 ή 5×8


$8 + 8 + 8 + 8 + 8 = 40$

8	8	8	8	8	8	8	8	8	8
--------------	--------------	--------------	--------------	--------------	---	---	---	---	---


2. Συμπλήρωσε τους σωστούς αριθμούς στον πίνακα της προπαίδειας του

8


$1 \times 8 =$	8
$2 \times$	8 = 16
$3 \times 8 =$	24
$4 \times 8 =$	32
$5 \times 8 =$	40
$6 \times$	8 = 48
$7 \times 8 =$	56
$8 \times 8 =$	64
$9 \times 8 =$	72
$10 \times 8 =$	80




3. Συμπλήρωσε τα παρακάτω γινόμενα




Two mice are holding two vertical cards. The left card shows the multiplication 10×1 with the result 10 in a red box. The right card shows the multiplication 8×5 with the result 40 in a red box.




Two frogs are holding two vertical cards. The left card shows the multiplication 1×10 with the result 10 in a red box. The right card shows the multiplication 8×8 with the result 64 in a red box.




Two monkeys are holding two vertical cards. The left card shows the multiplication 4×8 with the result 32 in a red box. The right card shows the multiplication 2×6 with the result 12 in a red box.



Two dogs are holding two vertical cards. The left card shows the multiplication 6×8 with the result 48 in a red box. The right card shows the multiplication 5×9 with the result 45 in a red box.



Two boys are holding two vertical cards. The left card shows the multiplication 5×7 with the result 35 in a red box. The right card shows the multiplication 8×6 with the result 48 in a red box.



Two mice are holding two vertical cards. The left card shows the multiplication 8×3 with the result 24 in a red box. The right card shows the multiplication 9×2 with the result 18 in a red box.