


Όνομα: \_\_\_\_\_ Τάξη: \_\_\_\_\_

Σχημάτισε με το μολύβι σου τις γραμμές.





ΔΗΜΟΤΙΚΟ ΣΧΟΛΕΙΟ .....

Όνομα: \_\_\_\_\_ Τάξη: \_\_\_\_\_

Διαγνωστική άσκηση στην Ενότητα 2

(Ελληνικά Α' Δημοτικού)

1. Γράφω τα μικρά γράμματα δίπλα από τα κεφαλαία ή το αντίθετο.

Α \_\_\_\_\_ Σ \_\_\_\_\_ Κ \_\_\_\_\_ Ι \_\_\_\_\_ Ε \_\_\_\_\_

ν \_\_\_\_\_ ο \_\_\_\_\_ π \_\_\_\_\_ τ \_\_\_\_\_ ρ \_\_\_\_\_

2. Γράφω τι δείχνουν οι εικόνες.



-----

-----

-----



-----

-----

-----

3. Βάζω τόνο και διαβάζω:

πατερας

πανι

καπερο

κανονι

ποταμι

πινερο

πακετο

ρακετα

νοσοκομα ενα

ΌΝΟΜΑ:

# ΟΙ ΑΡΙΘΜΟΙ ΜΕΧΡΙ ΤΟ 20 ΠΡΟΣΘΕΣΗ



$11 + 5 = \underline{\hspace{2cm}}$

$4 + 13 = \underline{\hspace{2cm}}$

$16 + 8 = \underline{\hspace{2cm}}$

$9 + 13 = \underline{\hspace{2cm}}$

$12 + 7 = \underline{\hspace{2cm}}$

$4 + 12 = \underline{\hspace{2cm}}$

$10 + 9 = \underline{\hspace{2cm}}$

$8 + 12 = \underline{\hspace{2cm}}$

$12 + 5 = \underline{\hspace{2cm}}$

$7 + 8 = \underline{\hspace{2cm}}$

$11 + 6 = \underline{\hspace{2cm}}$

$1 + 12 = \underline{\hspace{2cm}}$

$0 + 13 = \underline{\hspace{2cm}}$

$9 + 7 = \underline{\hspace{2cm}}$

$9 + 11 = \underline{\hspace{2cm}}$

$17 + 2 = \underline{\hspace{2cm}}$

$5 + 14 = \underline{\hspace{2cm}}$

$9 + 2 = \underline{\hspace{2cm}}$

$11 + 6 = \underline{\hspace{2cm}}$

$15 + 4 = \underline{\hspace{2cm}}$

$2 + 15 = \underline{\hspace{2cm}}$

$1 + 18 = \underline{\hspace{2cm}}$

$14 + 6 = \underline{\hspace{2cm}}$

$12 + 0 = \underline{\hspace{2cm}}$

$2 + 14 = \underline{\hspace{2cm}}$

$10 + 10 = \underline{\hspace{2cm}}$

$1 + 19 = \underline{\hspace{2cm}}$

$3 + 12 = \underline{\hspace{2cm}}$

$7 + 13 = \underline{\hspace{2cm}}$

$9 + 10 = \underline{\hspace{2cm}}$

$12 + 4 = \underline{\hspace{2cm}}$

$8 + 10 = \underline{\hspace{2cm}}$

$10 + 3 = \underline{\hspace{2cm}}$

$11 + 9 = \underline{\hspace{2cm}}$

$14 + 0 = \underline{\hspace{2cm}}$

$13 + 5 = \underline{\hspace{2cm}}$

$20 + 0 = \underline{\hspace{2cm}}$

$5 + 6 = \underline{\hspace{2cm}}$

$7 + 4 = \underline{\hspace{2cm}}$

$7 + 6 = \underline{\hspace{2cm}}$

$9 + 5 = \underline{\hspace{2cm}}$

$3 + 9 = \underline{\hspace{2cm}}$

$4 + 6 = \underline{\hspace{2cm}}$

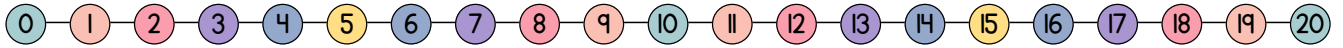
$4 + 9 = \underline{\hspace{2cm}}$

$13 + 5 = \underline{\hspace{2cm}}$

ΌΝΟΜΑ:

# ΟΙ ΑΡΙΘΜΟΙ ΜΕΧΡΙ ΤΟ 20

## ΑΦΑΙΡΕΣΗ



$9 - 2 = \underline{\quad}$

$6 - 5 = \underline{\quad}$

$16 - 2 = \underline{\quad}$

$2 - 0 = \underline{\quad}$

$12 - 4 = \underline{\quad}$

$8 - 5 = \underline{\quad}$

$10 - 9 = \underline{\quad}$

$9 - 7 = \underline{\quad}$

$14 - 3 = \underline{\quad}$

$11 - 9 = \underline{\quad}$

$17 - 9 = \underline{\quad}$

$12 - 1 = \underline{\quad}$

$6 - 6 = \underline{\quad}$

$8 - 7 = \underline{\quad}$

$13 - 2 = \underline{\quad}$

$3 - 2 = \underline{\quad}$

$10 - 5 = \underline{\quad}$

$12 - 3 = \underline{\quad}$

$11 - 9 = \underline{\quad}$

$10 - 6 = \underline{\quad}$

$5 - 4 = \underline{\quad}$

$17 - 8 = \underline{\quad}$

$13 - 7 = \underline{\quad}$

$13 - 6 = \underline{\quad}$

$14 - 7 = \underline{\quad}$

$19 - 9 = \underline{\quad}$

$19 - 9 = \underline{\quad}$

$6 - 3 = \underline{\quad}$

$14 - 4 = \underline{\quad}$

$20 - 5 = \underline{\quad}$

$10 - 8 = \underline{\quad}$

$16 - 9 = \underline{\quad}$

$4 - 0 = \underline{\quad}$

$17 - 4 = \underline{\quad}$

$18 - 9 = \underline{\quad}$

$13 - 9 = \underline{\quad}$

$20 - 4 = \underline{\quad}$

$6 - 5 = \underline{\quad}$

$15 - 3 = \underline{\quad}$

$18 - 0 = \underline{\quad}$

$11 - 6 = \underline{\quad}$



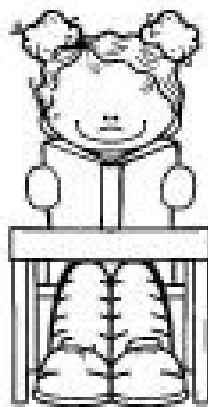

$18 - 2 = \underline{\quad}$

$13 - 6 = \underline{\quad}$

$18 - 7 = \underline{\quad}$

$19 - 4 = \underline{\quad}$

Ενόσω τη λέξη με την εικόνα, που ταιριάζει



μαθητής  
μαθήτρια  
πόρτα  
θρανίο  
σχολείο  
πίνακας  
έδρα  
παράθυρο  
δασκάλα  
τάξη  
παιδιά  
πινακίδα  
δάσκαλος  
καρέκλα

