





What time is it?



It's three o'clock

It's six o'clock

It's two o'clock

It's half past five

It's seven o'clock

It's half past four

It's half past three

It's half past nine

It's twelve o'clock

It's half past seven

It's half past two

It's half past six