
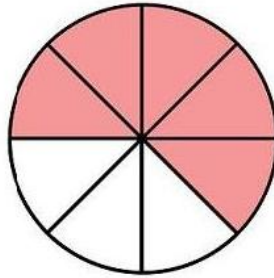



Οι κλασματικές μονάδες και οι απλοί κλασματικοί αριθμοί


Όνομα:.....

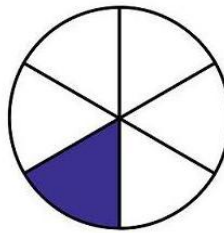
1. Γράψε με κλάσμα το μέρος που είναι χρωματισμένο. Έπειτα κύκλωσε τις κλασματικές μονάδες

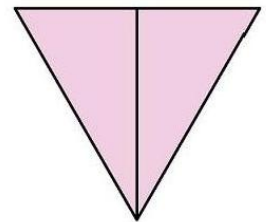





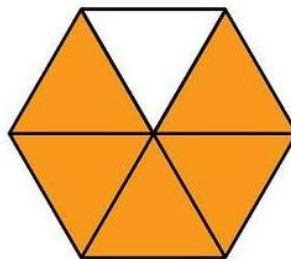


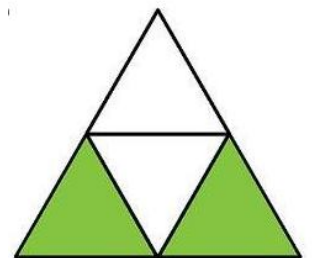




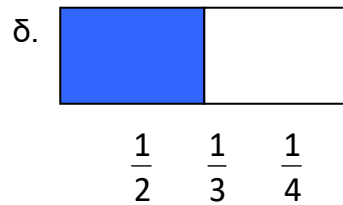
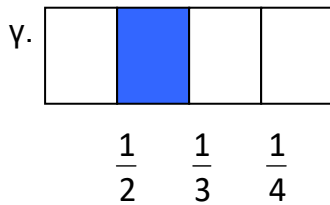
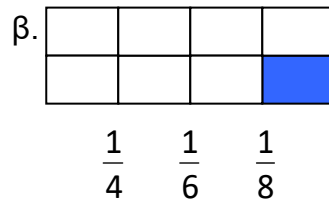
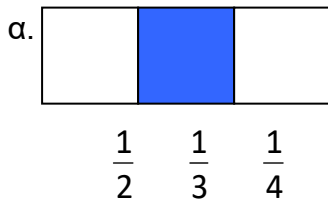




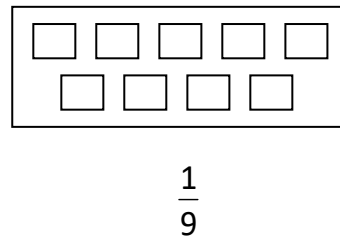
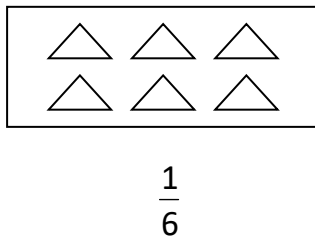
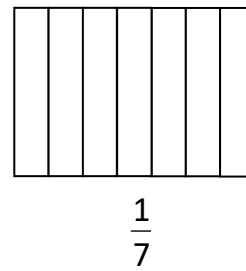
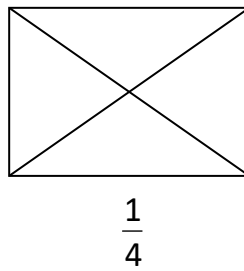
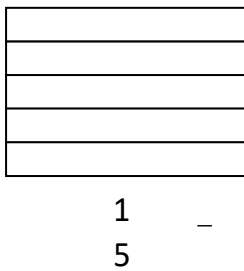




2. Τι μέρος κάθε σχήματος είναι χρωματισμένο; Βάζω σε κύκλο το κατάλληλο κλάσμα:



3. Χρωματίζω το μέρος του σχήματος που λέει κάθε κλάσμα:



4. Χρωματίζω το:

