

$$\begin{array}{r} \boxed{1} \\ 65 \\ + 5 \\ \hline \boxed{7} \boxed{0} \end{array}$$

$$\begin{array}{r} \boxed{1} \\ 86 \\ + 5 \\ \hline \boxed{9} \boxed{1} \end{array}$$

$$\begin{array}{r} \boxed{1} \\ 87 \\ + 4 \\ \hline \boxed{9} \boxed{1} \end{array}$$

$$\begin{array}{r} \boxed{1} \\ 39 \\ + 4 \\ \hline \boxed{4} \boxed{3} \end{array}$$

$$\begin{array}{r} \boxed{1} \\ 56 \\ + 7 \\ \hline \boxed{6} \boxed{3} \end{array}$$

$$\begin{array}{r} \boxed{1} \\ 59 \\ + 3 \\ \hline \boxed{6} \boxed{2} \end{array}$$

$$\begin{array}{r} \boxed{1} \\ 65 \\ + 8 \\ \hline \boxed{7} \boxed{3} \end{array}$$

$$\begin{array}{r} \boxed{1} \\ 79 \\ + 5 \\ \hline \boxed{8} \boxed{4} \end{array}$$

$$\begin{array}{r} \boxed{1} \\ 83 \\ + 7 \\ \hline \boxed{9} \boxed{0} \end{array}$$

$$\begin{array}{r} \boxed{1} \\ 46 \\ + 6 \\ \hline \boxed{5} \boxed{2} \end{array}$$

$$\begin{array}{r} \boxed{1} \\ 88 \\ + 3 \\ \hline \boxed{9} \boxed{1} \end{array}$$

$$\begin{array}{r} \boxed{1} \\ 47 \\ + 7 \\ \hline \boxed{5} \boxed{4} \end{array}$$

$$\begin{array}{r} \boxed{1} \\ 19 \\ + 6 \\ \hline \boxed{2} \boxed{5} \end{array}$$

$$\begin{array}{r} \boxed{1} \\ 28 \\ + 2 \\ \hline \boxed{3} \boxed{0} \end{array}$$

$$\begin{array}{r} \boxed{1} \\ 56 \\ + 8 \\ \hline \boxed{6} \boxed{4} \end{array}$$

$$\begin{array}{r} \boxed{1} \\ 74 \\ + 8 \\ \hline \boxed{8} \boxed{2} \end{array}$$

$$\begin{array}{r} \boxed{1} \\ 29 \\ + 7 \\ \hline \boxed{3} \boxed{6} \end{array}$$

$$\begin{array}{r} \boxed{1} \\ 36 \\ + 4 \\ \hline \boxed{4} \boxed{0} \end{array}$$

$\begin{array}{r} 1 \\ 35 \\ + 39 \\ \hline 74 \end{array}$	$\begin{array}{r} 1 \\ 46 \\ + 26 \\ \hline 72 \end{array}$	$\begin{array}{r} 1 \\ 72 \\ + 18 \\ \hline 90 \end{array}$	$\begin{array}{r} 1 \\ 27 \\ + 65 \\ \hline 92 \end{array}$
$\begin{array}{r} 1 \\ 13 \\ + 48 \\ \hline 61 \end{array}$	$\begin{array}{r} 1 \\ 36 \\ + 29 \\ \hline 65 \end{array}$	$\begin{array}{r} 1 \\ 25 \\ + 19 \\ \hline 44 \end{array}$	$\begin{array}{r} 1 \\ 22 \\ + 49 \\ \hline 71 \end{array}$
$\begin{array}{r} 1 \\ 63 \\ + 37 \\ \hline 100 \end{array}$	$\begin{array}{r} 1 \\ 44 \\ + 26 \\ \hline 70 \end{array}$	$\begin{array}{r} 1 \\ 53 \\ + 49 \\ \hline 102 \end{array}$	$\begin{array}{r} 1 \\ 28 \\ + 54 \\ \hline 82 \end{array}$

Η Ναυσικά αγόρασε ένα φόρεμα 56 ευρώ και ένα σακάκι 38 ευρώ; Πόσα χρήματα έδωσε συνολικά για όλα τα ρούχα;



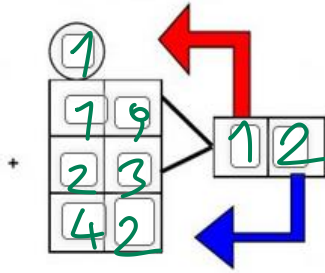
Υπολογίζω κάθετα:

$$\begin{array}{r} 7 \\ 56 \\ + 38 \\ \hline 94 \end{array}$$

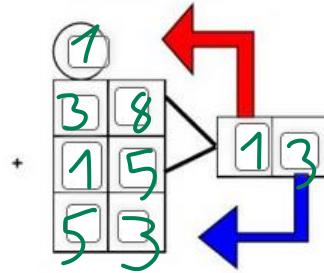
Απάντηση:

Έδωσε 94 €

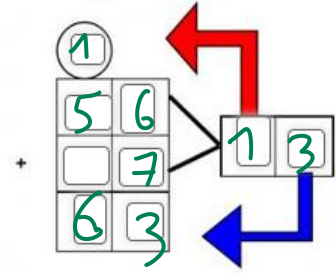
$19 + 23 = ;$



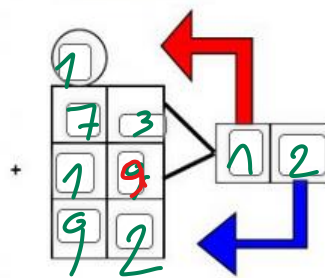
$38 + 15 = ;$



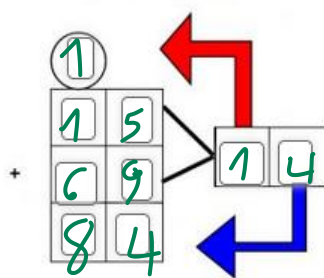
$56 + 7 = ;$



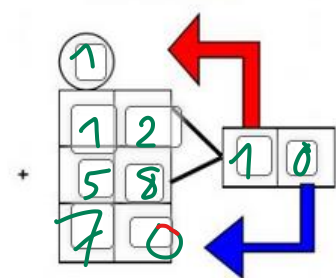
$73 + 19 = ;$



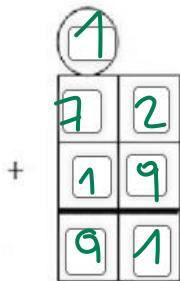
$15 + 69 = ;$



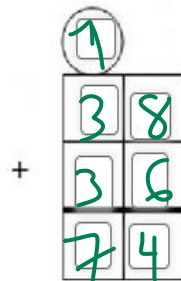
$12 + 58 = ;$



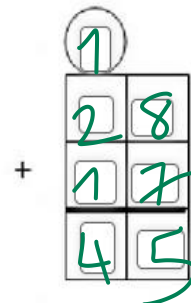
$72 + 19 = ;$



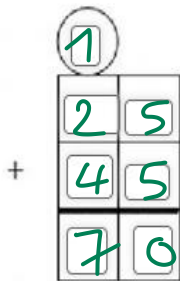
$38 + 36 = ;$



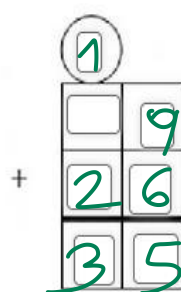
$28 + 17 = ;$



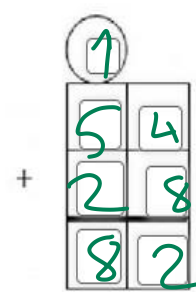
$25 + 45 = ;$



$9 + 26 = ;$



$54 + 28 = ;$



$\begin{array}{r} 4 \\ 3 \\ +2 \\ \hline 9 \end{array}$	$\begin{array}{r} 1 \\ 4 \\ +5 \\ \hline 10 \end{array}$	$\begin{array}{r} 2 \\ 7 \\ +3 \\ \hline 12 \end{array}$	$\begin{array}{r} 5 \\ 2 \\ +4 \\ \hline 11 \end{array}$	$\begin{array}{r} 6 \\ 2 \\ +4 \\ \hline 12 \end{array}$	$\begin{array}{r} 7 \\ 5 \\ +1 \\ \hline 13 \end{array}$
---	--	--	--	--	--

$\begin{array}{r} 8 \\ 1 \\ +2 \\ \hline 11 \end{array}$	$\begin{array}{r} 2 \\ 4 \\ +3 \\ \hline 9 \end{array}$	$\begin{array}{r} 5 \\ 3 \\ +6 \\ \hline 14 \end{array}$	$\begin{array}{r} 4 \\ 4 \\ +4 \\ \hline 12 \end{array}$	$\begin{array}{r} 1 \\ 5 \\ +3 \\ \hline 9 \end{array}$	$\begin{array}{r} 6 \\ 4 \\ +5 \\ \hline 15 \end{array}$
--	---	--	--	---	--

$\begin{array}{r} 2 \\ 3 \\ +3 \\ \hline 8 \end{array}$	$\begin{array}{r} 4 \\ 7 \\ +1 \\ \hline 12 \end{array}$	$\begin{array}{r} 5 \\ 5 \\ +6 \\ \hline 16 \end{array}$	$\begin{array}{r} 3 \\ 6 \\ +9 \\ \hline 18 \end{array}$	$\begin{array}{r} 4 \\ 1 \\ +4 \\ \hline 9 \end{array}$	$\begin{array}{r} 7 \\ 3 \\ +2 \\ \hline 12 \end{array}$
---	--	--	--	---	--

$\begin{array}{r} 9 \\ 1 \\ +4 \\ \hline 14 \end{array}$	$\begin{array}{r} 2 \\ 4 \\ +2 \\ \hline 8 \end{array}$	$\begin{array}{r} 5 \\ 5 \\ +5 \\ \hline 15 \end{array}$	$\begin{array}{r} 1 \\ 9 \\ +6 \\ \hline 16 \end{array}$	$\begin{array}{r} 4 \\ 7 \\ +1 \\ \hline 12 \end{array}$	$\begin{array}{r} 6 \\ 2 \\ +1 \\ \hline 9 \end{array}$
--	---	--	--	--	---

Η Αρετή αγόρασε ένα παγωτό και μια σάκα. Πόσα έδωσε και για τα δύο μαζί; Το δείχνω με άβακα και κάθετη πρόσθεση.

Απάντηση: Έδωσε 21€