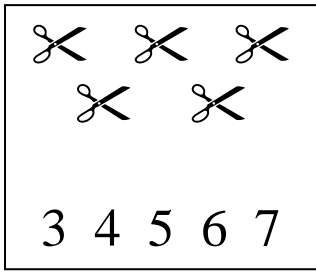
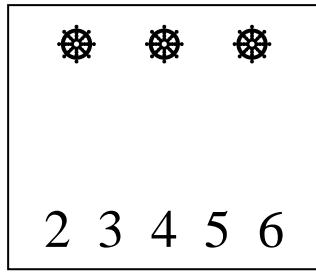


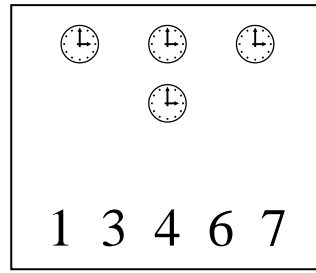
Να βάλεις σε κύκλο, τον αριθμό που δείχνει πόσα αντικείμενα έχει μέσα το κάθε τετράγωνο




3 4 5 6 7



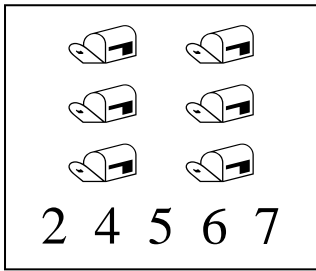
2 3 4 5 6




1 3 4 6 7



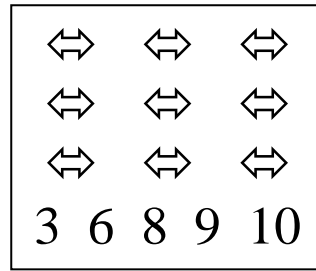
2 4 5 6 7




2 4 5 6 7



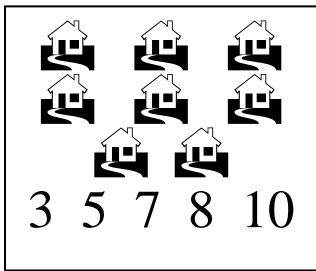
2 3 5 7 8



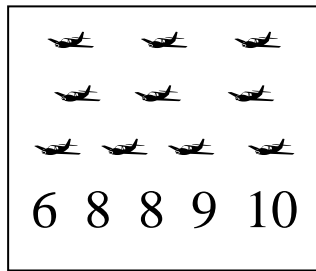
3 6 8 9 10



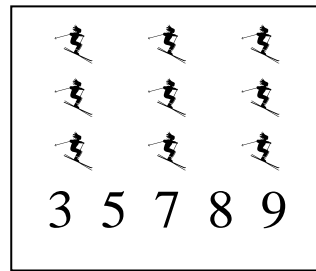
3 5 7 8 9



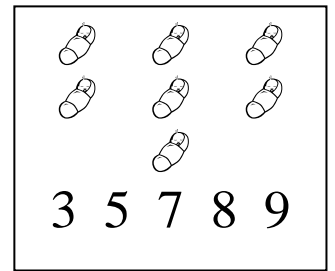
3 5 7 8 10



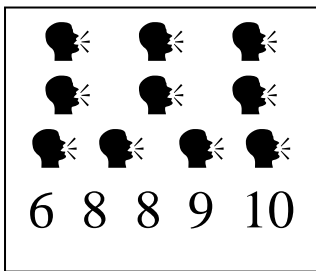
6 8 8 9 10



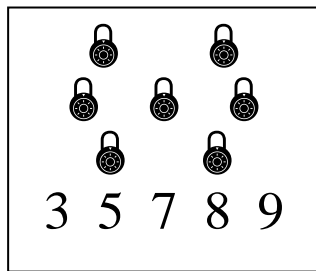
3 5 7 8 9



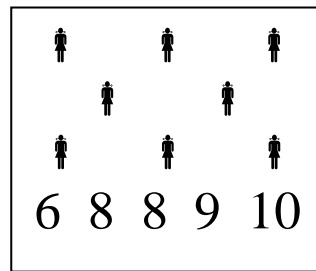
3 5 7 8 9



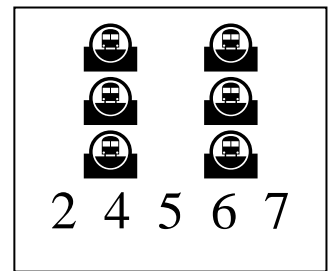
6 8 8 9 10



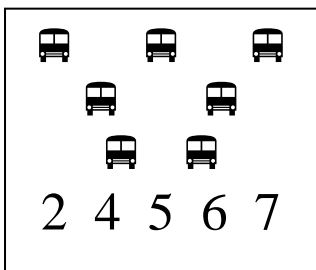
3 5 7 8 9




6 8 8 9 10



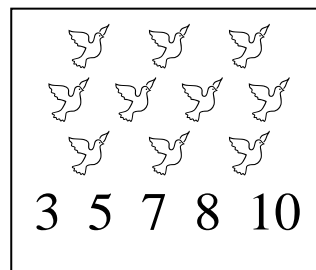
2 4 5 6 7



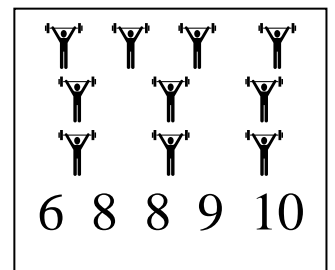
2 4 5 6 7



9 10



3 5 7 8 10



6 8 8 9 10