


# ΦΥΛΛΟ ΕΡΓΑΣΙΑΣ ΓΙΑ ΤΗΝ ΠΡΟΠΑΙΔΕΙΑ ΤΟΥ 7

Μετράω τα αυγά (μέσα και έξω από το καλάθι), συμπληρώνω τα αθροίσματα και βρίσκω την προπαίδεια του 7:



7

$1 \times 7 = \dots$




$7 + 7 = \dots$

$2 \times 7 = \dots$




$7 + 7 + 7 = \dots$

$3 \times 7 = \dots$




$7 + 7 + 7 + 7 = \dots$

$4 \times 7 = \dots$




$\dots + \dots + \dots + \dots + \dots = \dots$

$5 \times 7 = \dots$




$\dots + \dots + \dots + \dots + \dots + \dots = \dots$

$6 \times 7 = \dots$




$\dots + \dots + \dots + \dots + \dots + \dots + \dots = \dots$

$7 \times 7 = \dots$




$\dots + \dots + \dots + \dots + \dots + \dots + \dots = \dots$

$8 \times 7 = \dots$



$\dots + \dots + \dots + \dots + \dots + \dots + \dots + \dots = \dots$

$9 \times 7 = \dots$



$\dots + \dots + \dots + \dots + \dots + \dots + \dots + \dots + \dots + \dots = \dots$

$10 \times 7 = \dots$

