

Ο ψεύτης βοσκός  
λέει...



αλήθεια

ή

ψέματα;

Ο ψεύτης βοσκός λέει πως έχει 8 προβατάκια




αλήθεια ή ψέματα



6



+ 2






8

Ο ψεύτης βοσκός λέει πως έχει 5 προβατάκια







αλήθεια ή ψέματα



4




+1




5


Ο ψεύτης βοσκός λέει πως έχει 9 προβατάκια




αλήθεια ή ψέματα



5



+4






9

Ο ψεύτης βοσκός λέει πως έχει 6 προβατάκια





αλήθεια ή ψέματα









4



+2



6

Ο ψεύτης βοσκός λέει πως έχει 4 προβατάκια






αλήθεια ή ψέματα



3




+1



4

Ο ψεύτης βοσκός έχει **5** προβατάκια





Ο λύκος πήρε 1 προβατάκι

Ο ψεύτης βοσκός λέει πως τώρα έχει 3

**αλήθεια ή ψέματα**






$$\begin{array}{r} 5 \\ - 1 \\ \hline \end{array}$$



4

Ο ψεύτης βοσκός έχει **5** προβατάκια









Ο λύκος πήρε 2 προβατάκια




Ο ψεύτης βοσκός λέει πως τώρα έχει 4

**αλήθεια ή ψέματα**






5  
- 2



3

Ο ψεύτης βοσκός έχει **5** προβατάκια








Ο λύκος πήρε 3 προβατάκια

Ο ψεύτης βοσκός λέει πως τώρα έχει 1



**αλήθεια ή ψέματα**








$$\begin{array}{r} 5 \\ - 3 \\ \hline \end{array}$$



$$2$$

Ο ψεύτης βοσκός έχει **5** προβατάκια







Ο λύκος πήρε 4 προβατάκια

Ο ψεύτης βοσκός λέει πως τώρα έχει 2

**αλήθεια ή ψέματα**





$$\begin{array}{r} 5 \\ -4 \\ \hline \end{array}$$



1